



WINTER VACATION ASSIGNMENT CLASS-III, 2025-26

Looking for some interesting fun learning assignment to make your learning session interesting and engaging! Here in this assignment, you will find some very interesting and engaging tasks that will be fun solving.

ENGLISH

1. Imagine you have a magical remote control that can pause everyone and everything around you for exactly one hour. You will have zero distractions, so you can focus on one single task and make it perfect.

Why would you use the magical remote? *(Write three lines)*

2. Help Leo pack for his space trip by filling in the blanks with the best word: and, or, but.

The Trip to Space

Leo wanted to bring his space helmet (1) _____ his gravity boots. He packed his shiny telescope, (2) _____ he forgot his favourite star map! He had to decide quickly if he should take the blue rocket (3) _____ the red one, (4) _____ either way, he was ready for an amazing adventure!

3. **Identify the noun and the verb in the following sentences.**

(a) Our teacher nicely explained the difficult problem.

(b) She quickly found a secret map.

(c) The tiny cat patiently waited for its dinner.

4. Complete till page number 45 of your cursive handwriting book.

5. **Project:** Write three sentences on a card and paste it in your assignment notebook using correct end punctuation. *(full stop, question mark and exclamation mark)*

हिन्दी

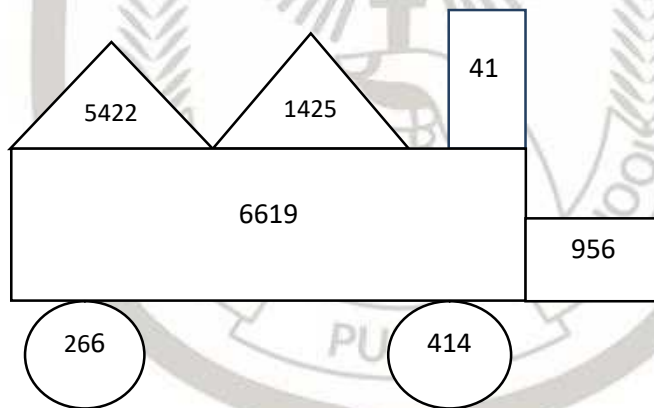
1. नाव पर चढ़कर हम नदी पार कर सकते हैं। ऐसे ही एक स्थान से दूसरे स्थान तक जाने के लिए काम आने वाले साधनों के चित्रों के नाम सहित पोस्टर बनाइए।
2. हिमालय की सबसे ऊँची चोटी का नाम 'माउंट एवरेस्ट' है। इस पर पहुँचने वाले व्यक्तियों के बारे में जानकारी एकत्रित करके लिखिए।
3. 'क्यों-क्यों, कैसे-कैसे' पाठ के अनुसार रामपाल ने जो किया वह ठीक था या गलत? कारण सहित लिखिए।
4. 'कागज़ का सदुपयोग' विषय पर लगभग 50 शब्दों में एक अनुच्छेद लिखिए।
5. पाठ में दिए गए सभी विराम-चिह्नों का प्रयोग करते हुए वाक्य लिखिए।

MATHEMATICS

- Rupa has 45 pots of plants. She puts 16 earthworms in each pot to nourish the soil. How many earthworms does she put in all?
- Guess who am I?
I am a 4-digit number. My thousands place digit is 4 less than my hundreds place digit.
My hundreds place digit is the largest 1-digit number.
My tens place digit is 4.
My ones place digit is 4 less than thousands place digit.
- Inventions of different machines over time have made our lives easier. Some important inventions are given below.

Mercury Thermometer Year of Invention: 1714 Inventor: Daniel Gabriel Fahrenheit	Calculator Year of Invention: 1642 Inventor: Blaise Pascal	Stethoscope Year of Invention: 1816 Inventor: Rene Laennec
--	---	---

- How many years ago was the Calculator invented?
 - After how many years of the invention of Calculator was the Stethoscope invented?
 - If the present year is 2025, how many years ago was the Mercury Thermometer invented?
- Mohan deposited ₹5489 in his account on the first day and deposited ₹4045 on the second day. He already had ₹2785 in his account. What is his account balance after the second day?
 - Solve the questions and colour the answer as directed.



- | | |
|---------------------------|---------------------------|
| (a) $849 + 107 =$ Blue | (b) $46 \times 9 =$ Red |
| (c) $685 - 419 =$ Green | (d) $246 \div 6 =$ Brown |
| (e) $6221 - 799 =$ Black | (f) $5921 + 698 =$ Orange |
| (g) $95 \times 15 =$ Pink | |


ENVIRONMENTAL STUDIES

1. During Onam festival in Kerala, a famous boat race called Vallam Kali is held on rivers. The boats are long and heavy, and many rowers sit in them. They use river water to float and move the boats forward. People gather along the river to watch and cheer. The race shows how water plays an important role in celebrations.



Apart from festivals like Vallam Kali, what are two other ways people can use the same river water?

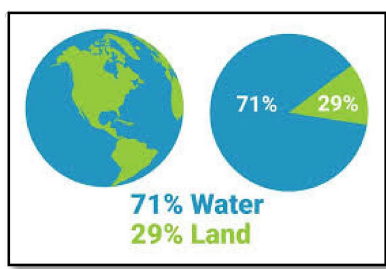
2. At a railway station, both passenger trains and goods trains arrive. Many people work together to make the railway system run smoothly, such as the ticket examiner, guard, shopkeepers, and porters.



- (a) How does the ticket examiner help passengers during a journey?
 - (b) What problem might passengers face if there are no porters at the railway station?
3. About 71% of the Earth is covered with water.

Out of this, only about 2.7% is fresh water.

From that fresh water, less than 1% is clean and usable for drinking and daily needs.



How does wasting water at home affect the small amount of clean water available?

4. Earlier, trains ran on coal, which caused smoke and pollution. Now, most trains and trams use electricity, a cleaner and efficient energy. Cars and buses run on CNG, petrol, or diesel. CNG pollutes less than petrol and diesel. This shift shows transport is moving towards cleaner energy to protect the environment.



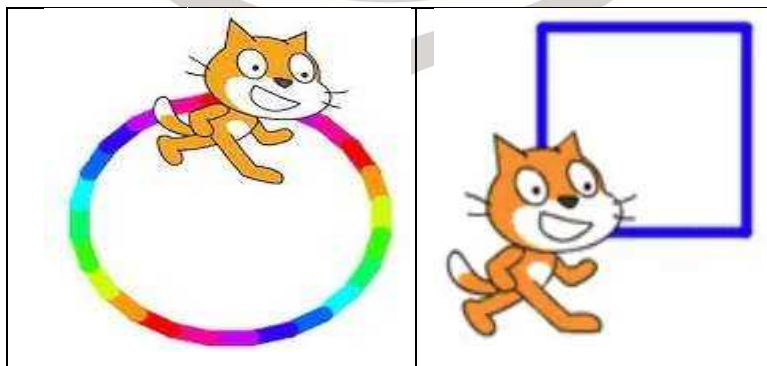
- (a) Why did trains earlier run on coal and why are they now using electricity?
5. Make a 3D model of water cycle.

OR

Make a 'Diya' using clay and decorate it.

COMPUTER

- Write the use of Pen Blocks.
- Write the use of Control Blocks Category.
- Write any two blocks name present in each of the following blocks.
 - Pen blocks
 - Motion blocks
 - Event blocks
- Write the code to make your sprite do the following activity in Scratch 3.



5. Draw 4 (four) AI devices used at home and colour them.
