



DELHI PUBLIC SCHOOL GAYA

(Under the aegis of the Delhi Public School Society, New Delhi)
Affiliated to C.B.S.E, New Delhi Affiliation No.330530, School Code – 65572

DURGA PUJA HOLIDAY ASSIGNMENT CLASS-IV, 2025-26

Looking for some interesting fun learning assignment to make your learning session interesting and engaging! Here in this assignment, you will find some very interesting and engaging tasks that will be fun solving.

ENGLISH

1. Answer the following questions:

- (a) If you were Juan's friend, what advice would you give him so he doesn't lose the crabs and the salt again?
- (b) Why do you think Juan's mother was angry at the end?

2. Fill in the blanks with 'will + verb':

- (a) I ____ (party) with my friends tomorrow.
- (b) He ____ (visit) his grandparents next week.
- (c) Sadia ____ (bake) cookies for us.

3. Match each sentence in Column A with its tense type in Column B.

- | <i>Sentences (Column-A)</i> | <i>Tense Types (Column-B)</i> |
|------------------------------------|--------------------------------|
| (a) She goes to school every day. | (i) Past Continuous Tense |
| (b) I am reading a book now. | (ii) Simple Past Tense |
| (c) They will visit us next week. | (iii) Present Continuous Tense |
| (d) We were playing in the garden. | (iv) Future Tense |
| (e) He watched a movie last night. | (v) Simple Present Tense |

4. Cursive Writing:

Complete up to page no. 25 of your 'Cursive Writing' book in beautiful handwriting.

5. Project- based question:

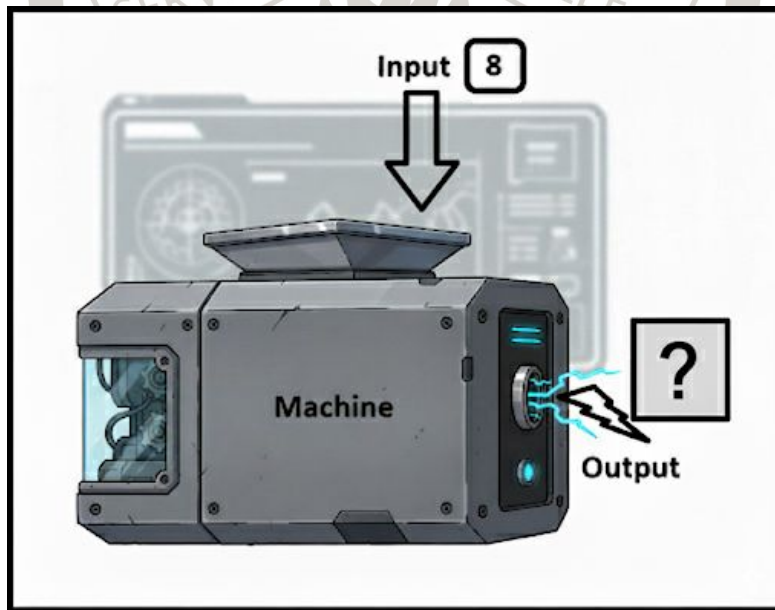
Imagine, you are the curious little boy from the poem 'Why'. Create a personal 'Book of Whys' where you write down at least 10 questions about the world around you, just like the boy in the poem.

हिन्दी

1. 'गुदड़ी के लाल' पाठ के अनुसार लालबहादुर शास्त्री जी की शिक्षा, उनके जेल जाने की तारीखें, वे कहाँ-कहाँ पर रहे आदि बातों की जानकारी जुटाकर एक परियोजना तैयार कीजिए।
2. आपने हिरण्यकश्यप, कंस एवं रावण के बारे में पौराणिक कथाओं में सुना होगा। 'स्वर्ग पर अधिकार' पाठ के आधार पर उनका संक्षिप्त परिचय लिखिए।
3. 'सालिम अली' पाठ में वर्णित कुछ पक्षियों के नाम लिखिए। यह भी लिखिए—
(क) सबसे छोटे पक्षी का नाम क्या है?
(ख) सबसे बड़े पक्षी का नाम क्या है?
4. शब्द-भंडार के अंतर्गत 15–25 संख्या के विलोम शब्दों को दर्शाता पुष्प तैयार कीजिए।
5. माँ दुर्गा के नौ रूपों का चित्र चिपका कर उनके हर रूप के महत्व के बारे में दो-दो वाक्य लिखिए।

MATHEMATICS

1. Find the multiples of 10 that lie between 125 and 225.
2. There were 320 gems in a jar. If 150 of the gems were red and the rest of the gems were white, then find the fraction of the gems that were white.
3. When a number is put into a machine, a different number comes out.

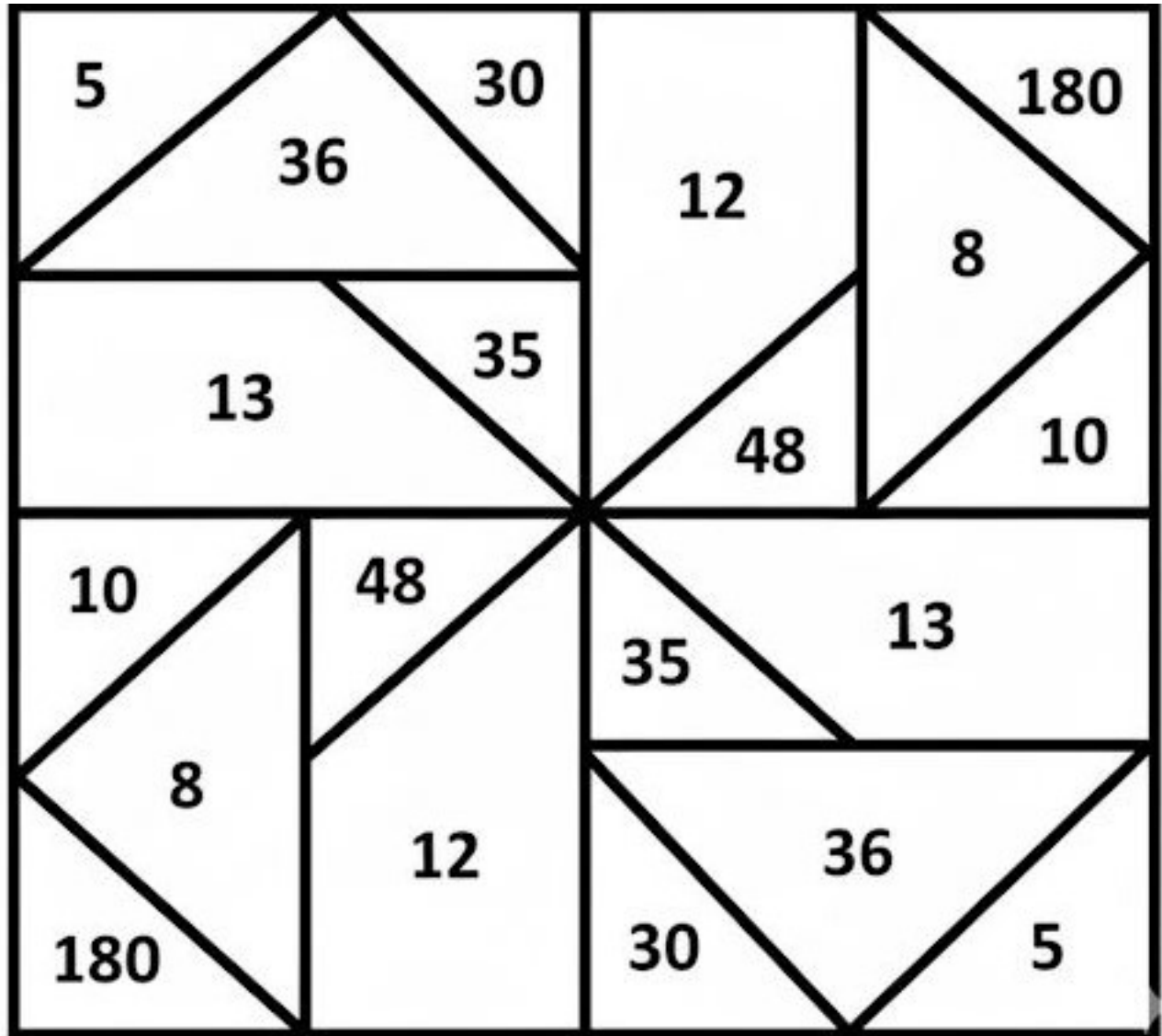


- (a) If 2 goes in, 6 comes out.
- (b) If 4 goes in, 12 comes out.
- (c) If 5 goes in, 15 comes out.

Find the rule of the machine and determine what number will come out if 8 goes in.

4. Write your date of birth in Roman Numerals.

5. Draw the given figure on a plain A4 sheet (or take a printout).



Shade the correct parts of the figure with the given colours

- | | |
|-------------------------------|-------------------------------|
| (a) HCF of 8 and 24 (Red) | (b) LCM of 9 and 12 (Green) |
| (c) HCF of 12 and 48 (Yellow) | (d) LCM of 16 and 24 (Blue) |
| (e) LCM of 5 and 7 (Pink) | (f) HCF of 65 and 91 (Purple) |
| (g) HCF of 15 and 20 (Orange) | (h) LCM of 10 and 15 (Brown) |
| (i) LCM of 20 and 18 (White) | (j) HCF of 20 and 30 (Black) |

ENVIRONMENTAL STUDIES

1. Food wastage during festivals is a significant concern in India, where large quantities of food are prepared and served to guests. India wastes nearly 20% of its available food during festivals.



- (a) Why does food wastage occur during festivals?
 - (b) How can food waste be reduced during festivals? List any two ways.
2. Work is a big part of our lives. Many people do different kinds of jobs to help our society run smoothly. Doctors, teachers, farmers, and many others work hard to make our lives better.




How do various occupations contribute to our daily lives? Mention about any two occupations.

3. Riya lives with her family in Kanpur. Due to transition from hot to cold weather or vice versa Kanpur is experiencing a significant increase in fever cases. Riya and her family members are also suffering from fever, sore throat, cough and weakness.

List two home remedies that Riya and her family should follow to get recover from these symptoms.

4. Look at the picture given below and answer the question:



What are the two benefits and drawbacks of spending too much time on screen?

5. Create a 3D model of a house present in city using eco-friendly materials.

COMPUTER

1. Pari is writing an email to invite her parents to celebrate their anniversary. She is also sending a copy of that mail to her relatives, which she wants to hide from her parents. In which field should she mention the email addresses of the relatives?
2. Shruti has drawn a scenery in Paint 3D. She wants to add some effects in the background. Which tool can she use to add the background effects?
3. List any four formatting features shown in the following box.

- Video provides a powerful way to help you prove your point.
- To make your document look professionally produced, Word provides header, footer, cover page, and text box designs that complement each other.
- Themes and styles also help keep your document coordinated. When you click Design and choose a new Theme, the pictures, charts, and SmartArt graphics change to match your new theme.
- Save time in Word with new buttons that show up where you need them, layout options appears next to it.
- Reading is easier, too, in the new Reading view. You can collapse parts of the document and focus on the text you want.

4. Create a poster on the topic “Water Cycle” using all the tools that you have learnt in Paint 3D. Print it and submit to the subject teacher.
5. List at least 4 (four) options available in:
 - (a) 2D Shapes
 - (b) 3D Objects
