



DELHI PUBLIC SCHOOL GAYA

(Under the aegis of the Delhi Public School Society, New Delhi)
Affiliated to C.B.S.E, New Delhi Affiliation No.330530, School Code - 65572

SUMMER VACATION ASSIGNMENT CLASS II (SESSION: 2025-26)

Your Summer Vacation assignment has some very interesting tasks that will make your learning session fun and engaging. So, let's start!

Name : _____ Class/Sec.: _____

ENGLISH

1. Look around your home and list 5 naming words. Write a sentence about each using a correct pronoun.

For e.g. chair – It is a chair.

brother – He is my brother.

- (a) _____
(b) _____
(c) _____
(d) _____
(e) _____

2. Fill in the blanks with the correct pronoun: he, she, it, they, we.

- (a) This is Ravi. _____ is my friend.
(b) My mother is a teacher. _____ goes to school every day.
(c) The dog is barking. _____ is hungry.
(d) My friends and I like football. _____ play together.
(e) John and Tina are siblings. _____ are very kind.

3. Write five common nouns and five proper nouns from the story.

On Saturday, Aarav and his sister Rina went to Central Park. They packed apples, sandwiches, and juice in a basket. Aarav brought his football, and Rina brought her doll named Pinky. They played near the Mansarovar lake and saw ducks swimming in the water. Later, they went to Grandma's house and told her about their fun day.

Common Nouns

1. _____
2. _____

Proper Nouns

1. _____
2. _____

3. _____
 4. _____
 5. _____

3. _____
 4. _____
 5. _____

4. Complete cursive writing till page number 23.

5. Make a “Noun Garden” craft. On flower petals, write singular nouns, and on leaves, write their plural forms.

6. **Choose the correct answer and colour it with blue.**

Birds make nests to (lay eggs / play in). They collect (sticks / toys) to build their nests. A nest keeps the baby birds (warm / wet). Some birds make nests in (trees / ground). Birds feel (safe / scared) in their nests. Sparrows make nests using (grass / paper). Eggs are kept (lost / safe) in the nest. Birds use their (beaks / hands) to build nests. Every bird makes a (different / same) kind of nest. Koels lay their eggs in (their own nests / crow's nests). Baby birds are called (cubs/ chicks).

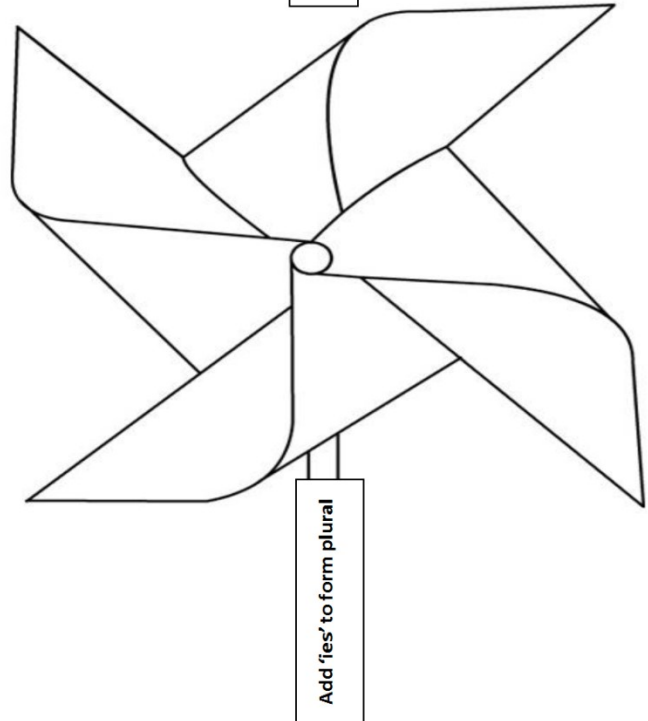
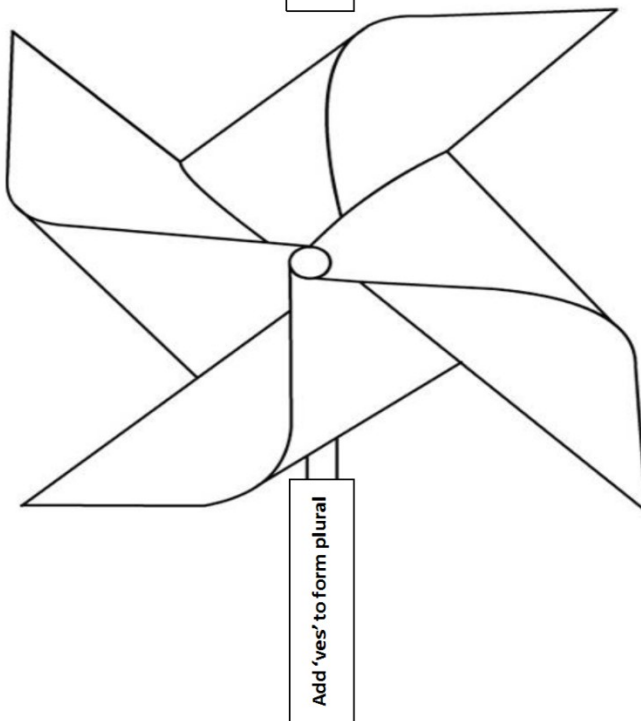
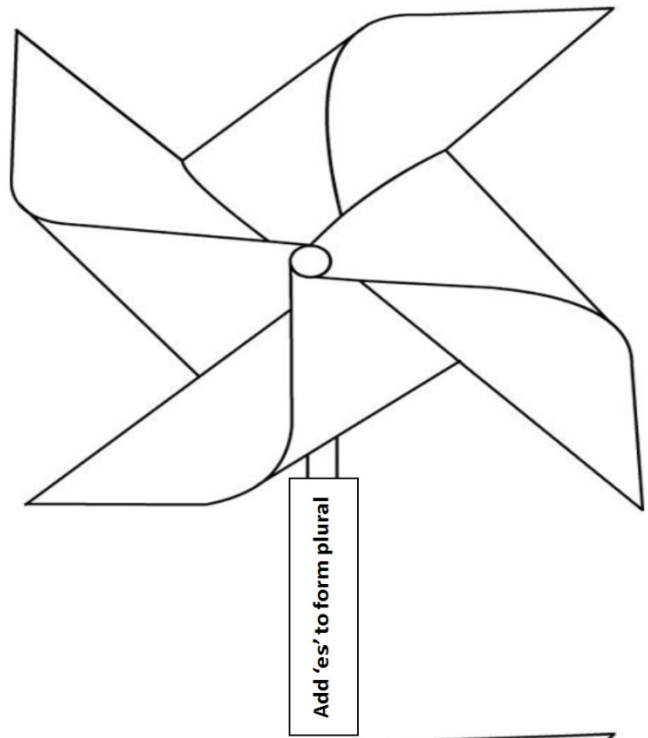
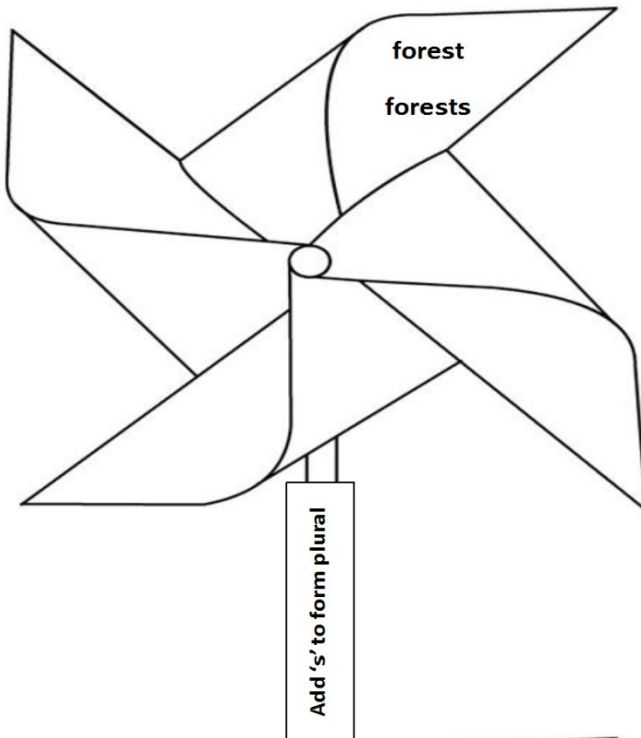
7. **Find the plural forms of these words in the grid.**

watch, woman, family, ox, buffalo, child, knife & umbrella

R	Y	T	C	D	B	U	F	F	L	D	X
G	C	H	I	L	D	R	E	N	O	Y	U
L	H	G	W	A	T	C	Q	W	X	F	M
O	W	A	T	C	H	E	S	O	E	A	B
X	K	N	I	F	E	U	Y	M	S	M	R
E	B	C	K	A	I	L	L	E	A	I	O
N	X	K	N	I	V	E	S	N	K	L	L
P	Z	U	M	B	R	J	K	Q	R	I	E
A	B	U	F	F	A	L	O	E	S	E	M
A	D	K	N	I	F	E	S	I	W	S	P
I	L	F	A	M	W	O	M	K	Q	S	N
N	U	M	B	R	E	L	L	A	S	B	I

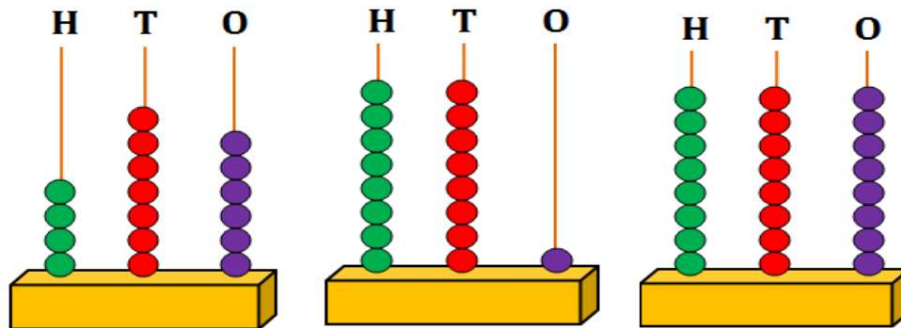
8. Write the plural forms of the given words inside the pinwheel and colour it.

cloth fox orange city life potato candy thief
switch phone knife bone wife story forest country




Name : _____ Class/Sec.: _____

1. Count the number of beads on the abacus and fill in the placeholders.













2. Colour all the odd numbers yellow and even numbers blue.



3. Look at the positions of each picture and fill in the boxes with correct ordinal numbers.



 <input type="text"/>	 <input type="text"/>	 <input type="text"/>	 <input type="text"/>
 <input type="text"/>	 <input type="text"/>	 <input type="text"/>	 <input type="text"/>
 <input type="text"/>	 <input type="text"/>		

4. Add the following numbers by counting beads into Ganit Mala of Maths kit.



$13 + 34 = \boxed{}$	$72 + 13 = \boxed{}$
$23 + 76 = \boxed{}$	$44 + 35 = \boxed{}$
$36 + 21 = \boxed{}$	$56 + 12 = \boxed{}$
$47 + 11 = \boxed{}$	$67 + 21 = \boxed{}$
$52 + 40 = \boxed{}$	$83 + 13 = \boxed{}$

5. Put the correct symbol $>$, $<$, or $=$ in the blanks given below.

$212 \bigcirc 231$	$567 \bigcirc 567$
$472 \bigcirc 562$	$354 \bigcirc 355$
$689 \bigcirc 590$	$173 \bigcirc 138$
$909 \bigcirc 899$	$815 \bigcirc 815$

6. Write the following in the short form.

500	+	80	+	3	=	
700	+	70	+	7	=	
500	+	30	+	5	=	
100	+	50	+	5	=	
200	+	60	+	9	=	

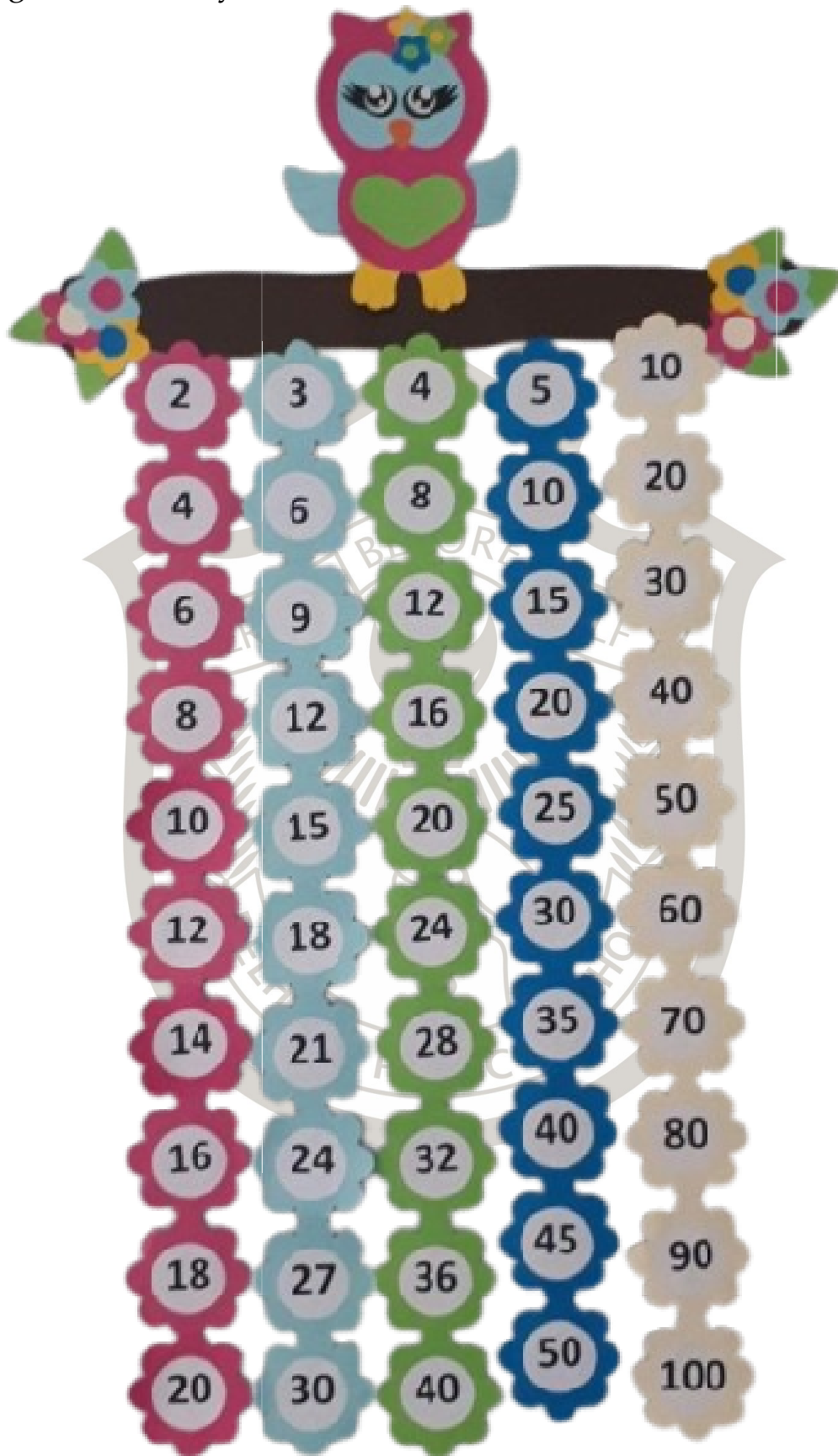
Activity:

7. With the help of your parents, make a train loaded with odd and even numbers (*any five*). Follow the given link for this activity:

<https://youtu.be/b2GlemYEeSs?si=jwRtLUkmjunRyz0E>



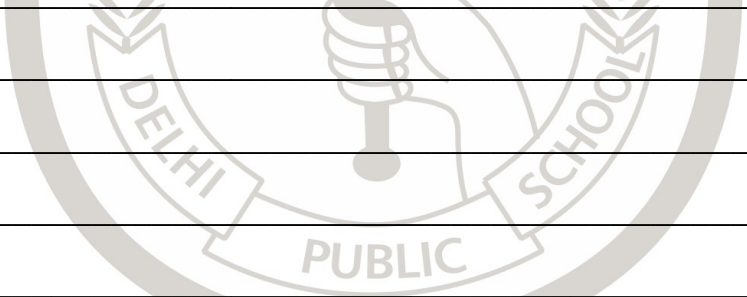
8. With the help of your parents, make multiplication tables (2,3,4,5 and 10) wall hanging and learn it by heart.



नाम:-..... कक्षा..... अनुक्रमांक.....

1. यदि आप भीखू की जगह होते और आपका सामना बौनों के साथ हो जाता, तब आपकी उनके साथ क्या-क्या बातें होती? सोचिए और दस वाक्यों में लिखिए।

2. आप अपने पिता की उन बातों को लिखिए, जिनसे आपको अपने जीवन में कुछ सीखने की प्रेरणा मिलती हो।



3. गर्मी की छुट्टी में आपको क्या करना पसंद है? पाँच वाक्यों में लिखिए।

4. गर्मी में खाए जाने वाले किसी भी पाँच फलों का प्रतिरूप क्ले की सहायता से तैयार कीजिए और दिए गए स्थान पर उनके नाम लिखिए।

5. हँसते/रोते/गाते/नाचते बच्चों की इमोजी बनाइए।



6. आपका मन पढ़ाई में खूब लगे, इसके लिए आपको क्या करना चाहिए? पाँच वाक्यों में लिखिए।

7. अं, अँ, अः का प्रयोग करते हुए पाँच-पाँच शब्द लिखिए।

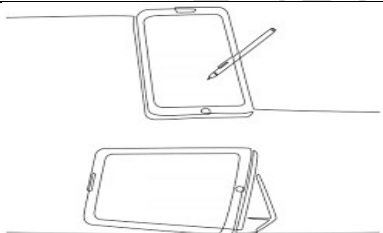
8. भारत में बोली जाने वाली किन्हीं पाँच बोलियों और उनके बोले जाने वाले क्षेत्रों के नाम लिखिए।

बोली	क्षेत्र


COMPUTER

Name : _____ Class/Sec.: _____


1. Label the types of computers.



2. Draw and colour the picture of a robot used at homes.



3. Match the following:



SIRI

SELF DRIVING CAR

ALEXA

4. Choose the correct options.

Who can only work when instructed? <input type="text"/>	<input type="button" value="Human"/> <input type="button" value="Computer"/>
Who need food to get energy? <input type="text"/>	<input type="button" value="Human"/> <input type="button" value="Computer"/>
Who needs electricity? <input type="text"/>	<input type="button" value="Human"/> <input type="button" value="Computer"/>
Who have feeling? <input type="text"/>	<input type="button" value="Human"/> <input type="button" value="Computer"/>
Who do many things at the same time? <input type="text"/>	<input type="button" value="Human"/> <input type="button" value="Computer"/>

5. Name five places where AI is used:

- (a) _____
- (b) _____
- (c) _____
- (d) _____
- (e) _____

6. Let's find out:

- (a) First Human robot. _____
- (b) First Robotic dog. _____

7. Write two advantages and disadvantages of computer:

ADVANTAGES	DISADVANTAGES

8. Write two uses of AI at home:

1. _____

2. _____

-----X-----

